



20 21 22 23 24 25 26 27 28 29

RELACIONA




VINT

$$20 + 1 = \overset{D}{2}\overset{U}{1}$$




VINT-I-U

$$20 + 2 = \overset{D}{2}\overset{U}{2}$$





VINT-I-DOS

$$10 + 10 = \overset{D}{2}\overset{U}{0}$$





VINT-I-TRES

$$20 + 5 = \overset{D}{2}\overset{U}{5}$$



VINT-I-QUATRE

$$20 + 3 = \overset{D}{2}\overset{U}{3}$$



VINT-I-CINC

$$20 + 4 = \overset{D}{2}\overset{U}{4}$$