



Le Quy Don Primary School

Name: .....

Class: 4A.....

MATH - GRADE 4

Revision (2)

1. Drag and drop to match the 3D objects to their names



cube

cuboid




sphere

cylinder

pyramid

cone

2. Join with arrows



hexagon

octagon

pentagon

3. How many triangles are there?  
\_\_\_\_\_ triangles

