



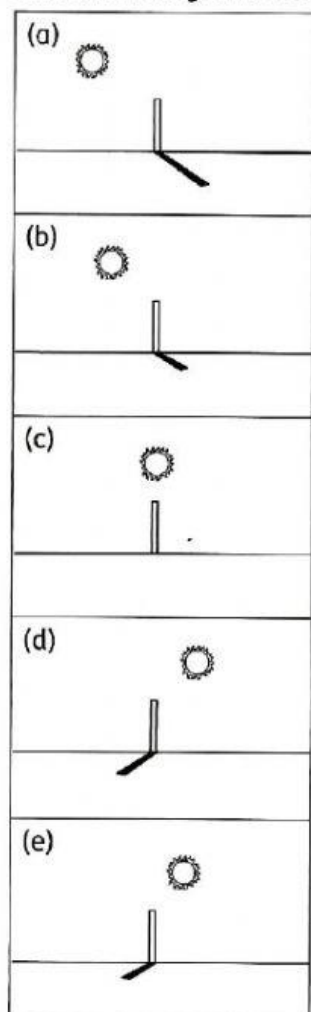
## 9.2 Rotation and Revolution of the Earth

3 Complete the table with the correct information.

Rotation of the Earth 	Movement of the Earth	Revolution of the Earth 
(a) _____	Way of movement	(b) _____
(c) _____	Period	(d) _____

(4 marks)

4 Match the diagrams with the suitable statements.



• Time: 12.00 noon Direction of shadow: None
• Time: 8.00 a.m. Direction of shadow: West
• Time: 6.00 p.m. Direction of shadow: East
• Time: 3.00 p.m. Direction of shadow: East
• Time: 11.00 a.m. Direction of shadow: West

(5 marks)