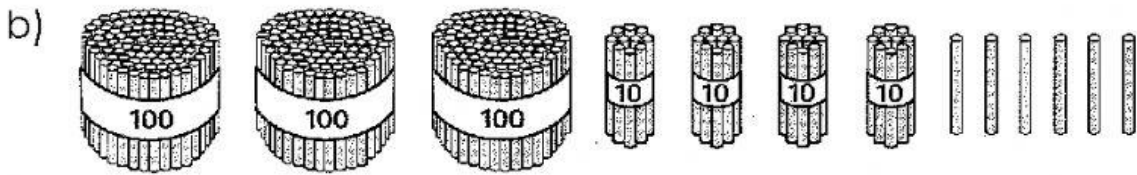


# Exercise 3 Hundreds, Tens and Ones

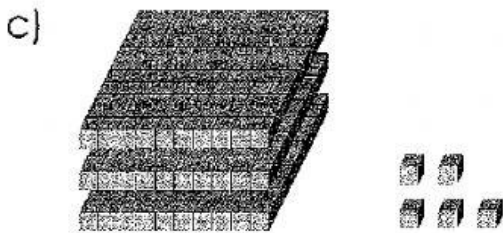
1. Write the numbers.



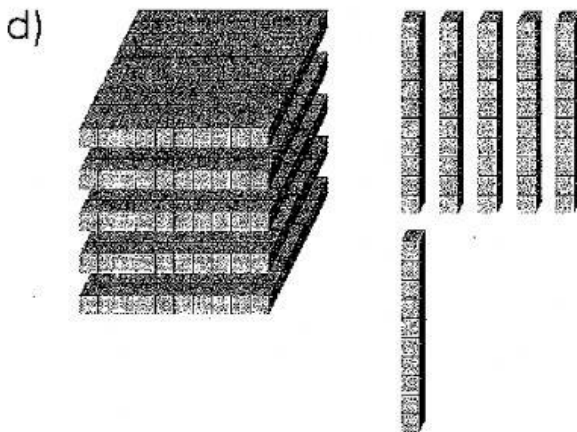
2 hundreds 1 ten 4 ones = \_\_\_\_\_



3 hundreds 4 tens 6 ones = \_\_\_\_\_



3 hundreds 5 ones = \_\_\_\_\_



5 hundreds 6 tens = \_\_\_\_\_