

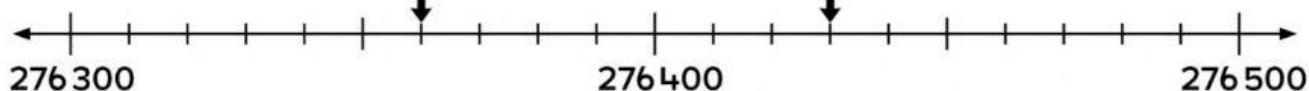
Name..... Class 5/.....No.....

Check up 2 Module 1

I. Write the number shown by each arrow.

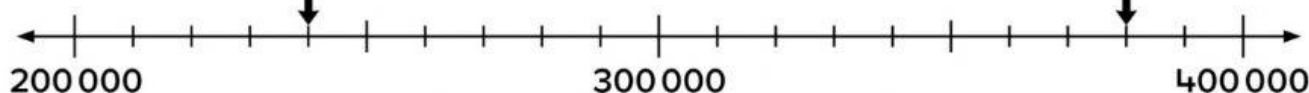
a.

b.

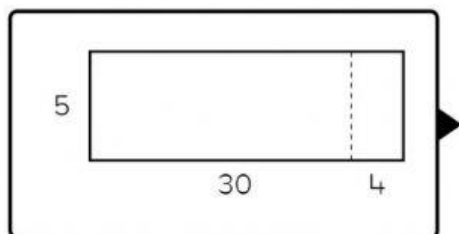
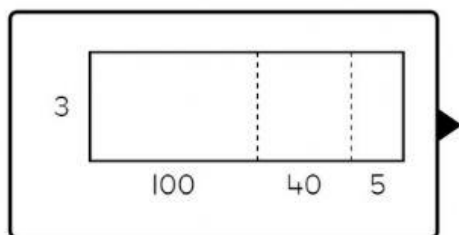
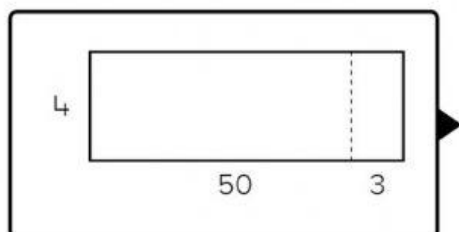


c.

d.



2. The pictures below show a partial-products multiplication strategy. Draw lines to connect each picture with a matching expression. Some pictures have more than one match. Not all expressions have a match.



$3 \times 100 + 3 \times 45$

$150 + 20$

$3 \times 40 + 3 \times 5$

53×4

$5 \times 30 + 5 \times 4$

$300 + 120 + 15$

$4 \times 50 + 4 \times 3$