




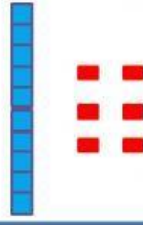
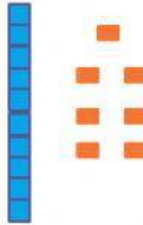

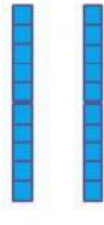


1. Count each set of blocks using place value. Drag and match the word form to the correct picture.

 <input data-bbox="167 616 550 728" type="text"/>	 <input data-bbox="598 616 981 728" type="text"/>	 <input data-bbox="1037 616 1420 728" type="text"/>
 <input data-bbox="167 974 550 1086" type="text"/>	 <input data-bbox="598 974 981 1086" type="text"/>	 <input data-bbox="1037 974 1420 1086" type="text"/>
 <input data-bbox="167 1344 550 1456" type="text"/>	 <input data-bbox="598 1344 981 1456" type="text"/>	 <input data-bbox="1037 1344 1420 1456" type="text"/>

2 Tens	1 ten and 7 ones	7 ones
1 ten and 4 ones	8 ones	1 ten and 9 ones
9 ones	1 ten and 6 ones	1 ten and 8 ones

2. Block match


20	16	15	12	10	13	11	14
----	----	----	----	----	----	----	----

3. Write the number

I have 5 tens and 2 ones.  
Who am I?

I am



4. Match.




T	O
3	7

T	O
1	6

T	O
2	6

T	O
6	1


5. Write the numbers in the boxes below.



Tens

Ones


Tens  Ones =



Tens

Ones

Tens  Ones =




Tens

Ones

 Tens 

=



Tens

Ones

 Tens 

=