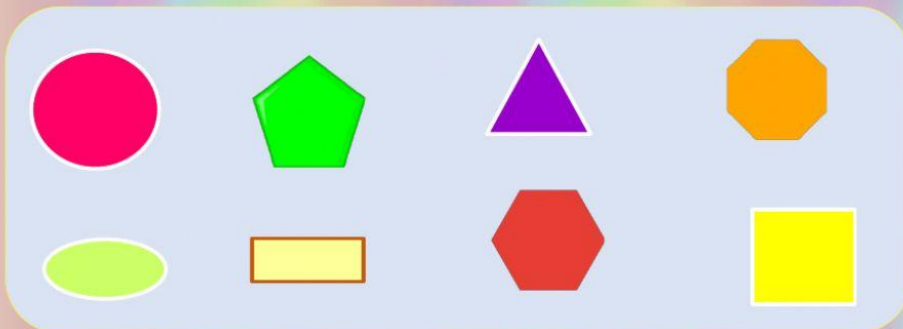


Math Primary 3 : Geometric shapes


Part1 : Put each shape to its name.




1. circle



5.pentagon



2. rectangle



6. oval



3. triangle



7. hexagon



4. square



8. octagon

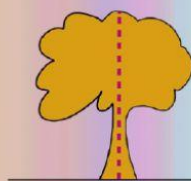
Part 2: Choose whether the shape is symmetric or not



Yes



No



Yes



No



Yes



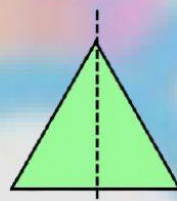
No



Yes



No



Yes



No



Yes



No