






Fill in the blanks.

		
United States of America	Great Britain	Australia
		
Saudi Arabia	Japan	

- 1 What is the currency of the following countries?
- a Malaysia    b Philippines    c Brunei    d Myanmar

- 2 Complete these.
- a The currency of Vietnam is .
- b  currency is rupiah.
- c Baht is  currency.
- d  is Japanese currency.
- e  currency is dollar.

- 3 What is the name of the country and its currency as shown below?

a 	b 	c 
---	---	--