
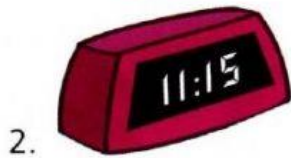


1 Look, read and match.



a. It's half past eleven.

b. It's a quarter to one.

c. It's half past one.

d. It's a quarter past eleven.

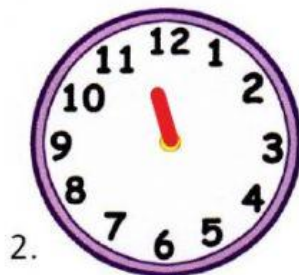
e. It's one o'clock.



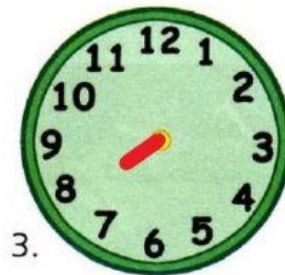
2 Read and draw the time. Drag minute hand to the correct picture.



It's three o'clock.



It's half past eleven.



It's a quarter to eight.



It's a quarter past six.