


# CONTA GLI ANIMALI NELLA RETE

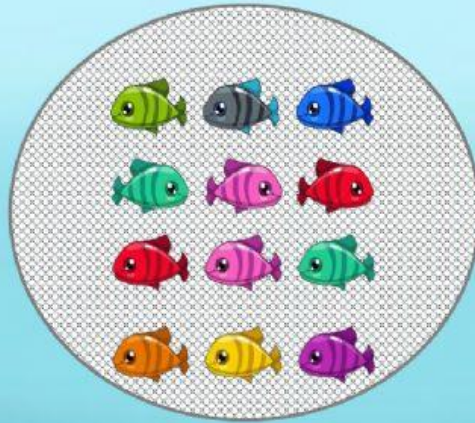


10

8

9

# CONTA GLI ANIMALI NELLA RETE




11

12

13

# CONTA GLI ANIMALI NELLA RETE



10

9

11



ATTENZIONE!  
C'E' UNO SQUALO CHE FA SPARIRE I PESCIOLINI



SE MANGIO  
3 PESCI.  
QUANTI NE  
RESTANO?



$$9 - 3 =$$

6

9

3

ATTENZIONE!  
C'E' UNO SQUALO CHE FA SPARIRE I PESCIOLINI



SE MANGIO  
5 PESCI.  
QUANTI NE  
RESTANO?



$$9 - 5 =$$

9

4

5

ATTENZIONE!

C'E' UNO SQUALO CHE FA SPARIRE I PESCIOLINI



SE MANGIO  
9 PESCI.  
QUANTI NE  
RESTANO?



$$9 - 9 =$$

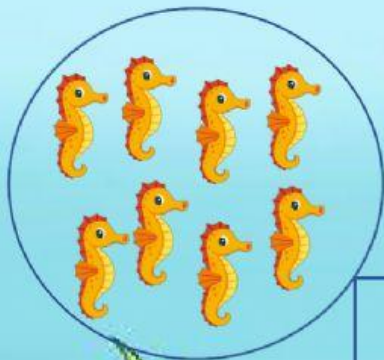
0

9

1




# CONFRONTA




8

E' ..... DI

7



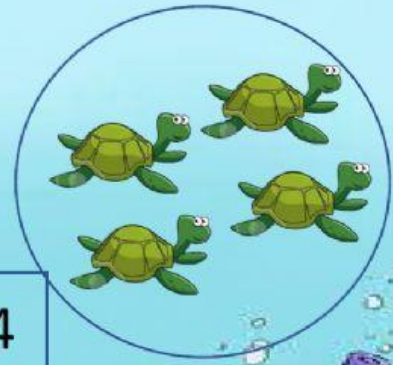
# CONFRONTA



7

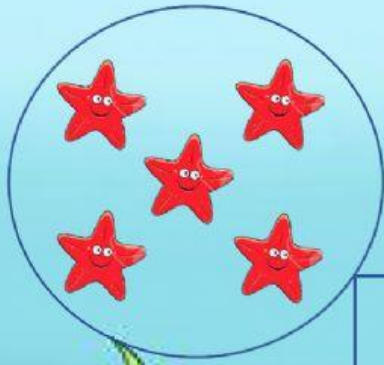
E' ..... DI

4





# CONFRONTA



5

E' ..... DI

5

