



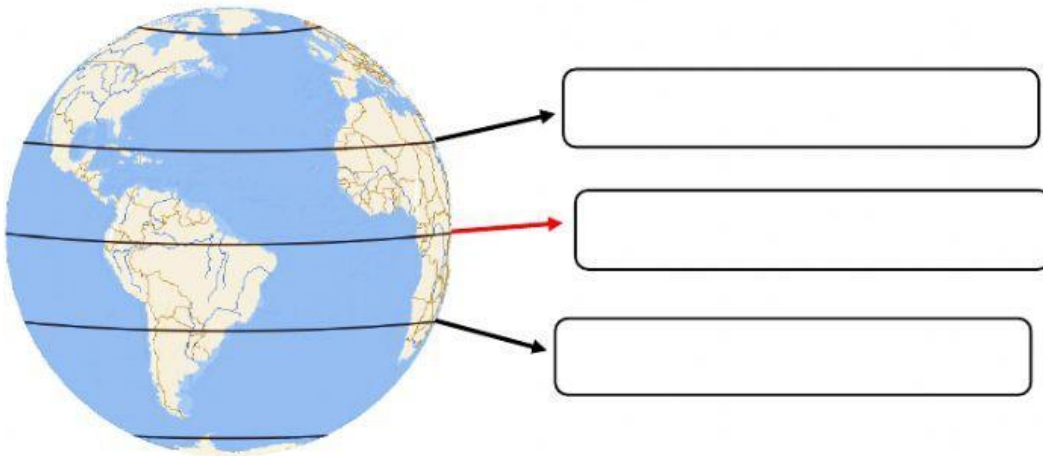
SOCIAL SCIENCE REMEDIAL QUIZ #2

Name: _____ Date: _____

Grade: _____ Total Score: _____ / 12 points. Mark: _____

Objective: Identify the main parallels and meridians of the Earth. Recognize the different ways of representing the planet Earth.

I. Write the name of the parallels, according to the picture. (___/3 pts)



II. Look at the box and write the correct concept according to its meaning. (___/4 pts)

Continents	Globe	Greenwich	Map	Oceans	Equator	Planisphere	Grid
------------	-------	-----------	-----	--------	---------	-------------	------

1. _____: Large masses of water that cover the Earth's surface.
2. _____: Imaginary line that divides the Earth into the Northern Hemisphere and the Southern Hemisphere.
3. _____: Combination of columns and rows on a plan.
4. _____: Representation of the Earth's Surface that preserves the planet spherical shape.



III. Circle the correct option. (___/5 pts)

1. What type of map is this?

- a) Economic map
- b) Historical map
- c) Political map
- d) Physical map

2. What continental features does the map show?

- a) Population
- b) Relief
- c) Economy
- d) Borders

3. The Prime Meridian divides Earth into two hemispheres:

- a) North pole and South pole
- b) East and North
- c) Eastern and Western
- d) Northern and Southern

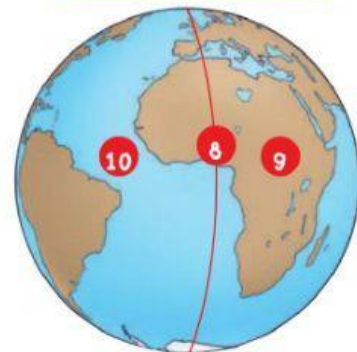
4. What does the number 8 represent?

- a) The Prime parallel
- b) The Tropic of Capricorn
- c) Equator Meridian
- d) Greenwich Meridian

Map of America

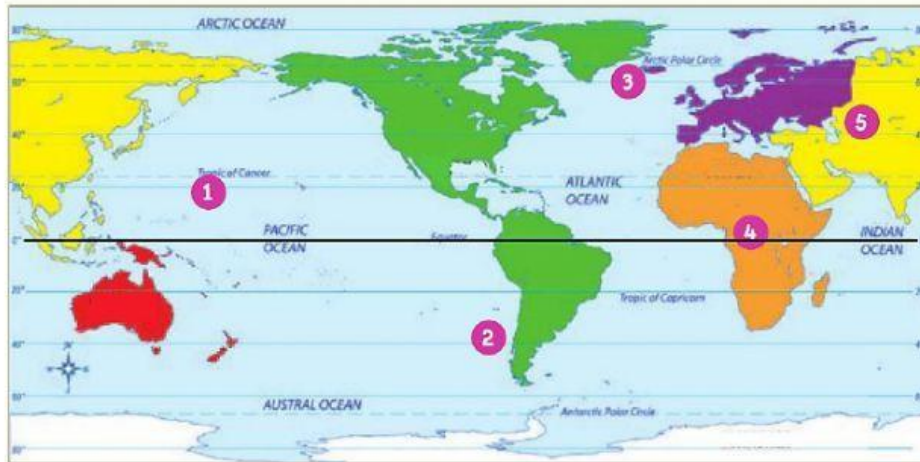


Representation of Earth





5. The Equator pass through the following continents:



- a) Europe, Asia, America and Africa.
- b) Oceania, Asia, Africa and America.
- c) Oceania, Europe, Antarctica and Asia.
- d) Arctic, Oceania, Africa and America.