



1 QUILO




2 QUILOS




5 QUILOS

QUANTS QUILOS HI HA A CADA REQUADRE?





8 QUILOS

4 QUILOS



10 QUILOS

7 QUILOS



9 QUILOS

5 QUILOS

