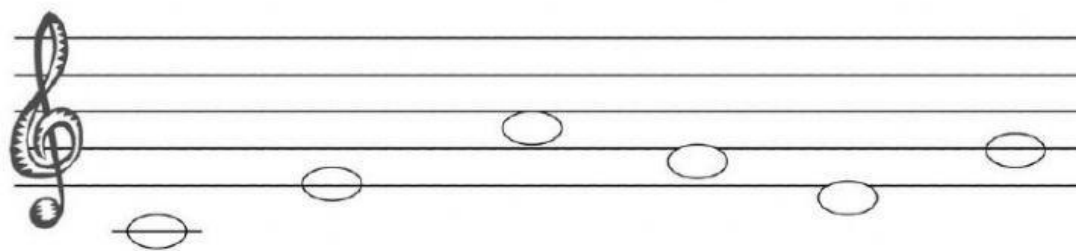


**CEIP LOPE DE VEGA  
M. CARMEN REALES**

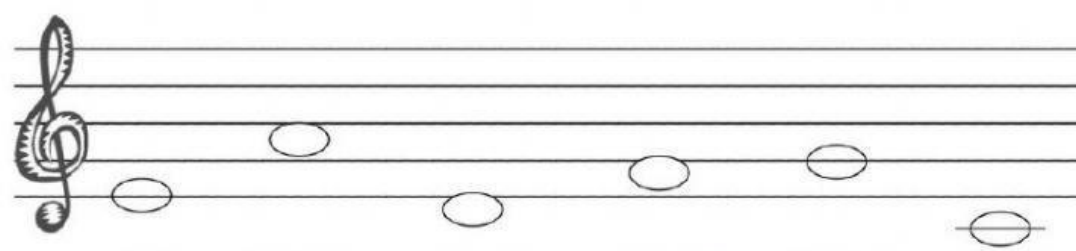
**Nombre:**

**Curso:**

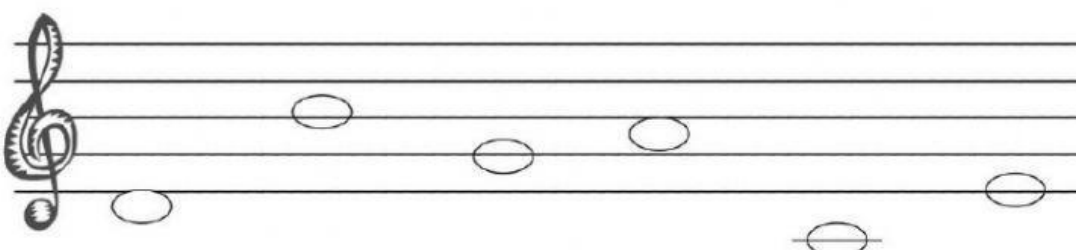
**Recuerda la escala musical y contesta el nombre de estas  
notas musicales:**



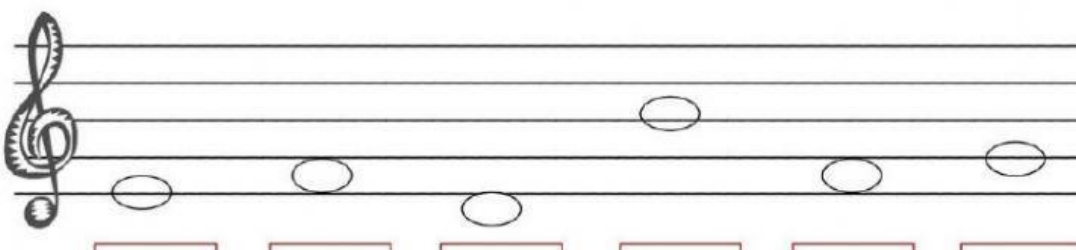
A musical staff in treble clef showing the first six notes of a scale: C4 (below the staff), D4 (first line), E4 (first space), F4 (second line), G4 (second space), and A4 (third line). Below each note is a purple rectangular box for labeling.



A musical staff in treble clef showing the next six notes of a scale: B4 (third space), C5 (third line), D5 (third space), E5 (fourth line), F5 (fourth space), and G5 (fifth line). Below each note is a yellow rectangular box for labeling.



A musical staff in treble clef showing the next six notes of a scale: A5 (fifth space), B5 (fifth line), C6 (first line of the next octave), D6 (first space), E6 (first line), and F6 (first space). Below each note is a green rectangular box for labeling.



A musical staff in treble clef showing the final six notes of a scale: G6 (first space), A6 (first line), B6 (first space), C7 (second line), D7 (second space), and E7 (third line). Below each note is a red rectangular box for labeling.