



Orientation Week 1 - Day 3

"Making Number Patterns"

Name : _____

Mark : ____/____


Class : _____

Date : _____


1. What is 1 more?

Write the number.


a.



b.




c.





2. What is 1 less than the number in the orange ball?
Write the number.

a.



_____.

b.



_____.

c.



_____.