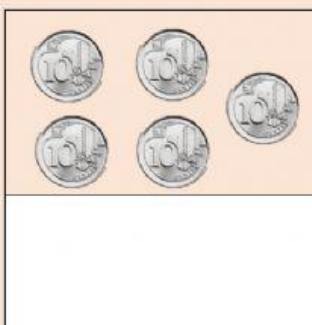

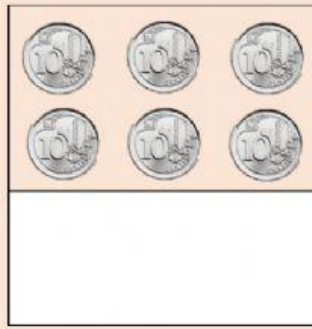
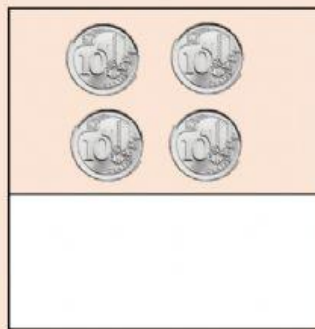


Click and drag the correct value to match under the coins



Value

\$0.20

\$0.60

\$0.40

\$0.50

Write the total value of 10cent coins



= \$0.____



= \$0.____



= \$0.____



= \$0.____

Write the total value of 10cent coins



= \$0.____



= \$0.____



= \$0.____



= \$0.____


Draw the correct number of 10 cent coins in the boxes

= \$0.30

= \$0.20

= \$0.50

= \$0.70



Draw the correct number of 10 cent coins in the boxes

= \$0.40

= \$0.60



= \$0.80

