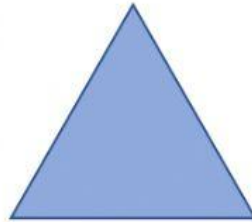




2D SHAPES

Write the name of each shape below.










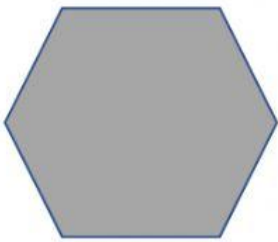


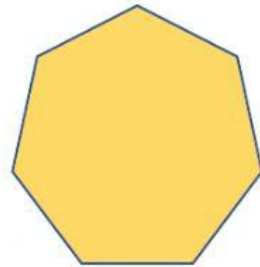


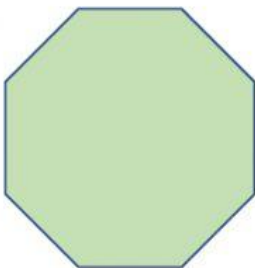













3D SHAPES

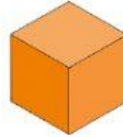


Name of Shape: _____

Faces: _____

Vertices: _____

Edges: _____

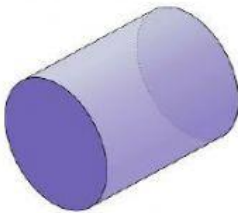


Name of Shape: _____

Faces: _____

Vertices: _____

Edges: _____

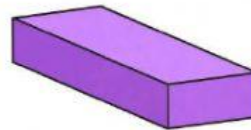


Name of Shape: _____

Faces: _____

Vertices: _____

Edges: _____



Name of Shape: _____

Faces: _____

Vertices: _____

Edges: _____



Name of Shape: _____

Faces: _____

Vertices: _____

Edges: _____



Name of Shape: _____

Faces: _____

Vertices: _____

Edges: _____

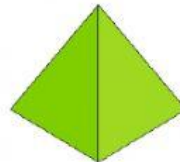


Name of Shape: _____

Faces: _____

Vertices: _____

Edges: _____



Name of Shape: _____

Faces: _____

Vertices: _____

Edges: _____