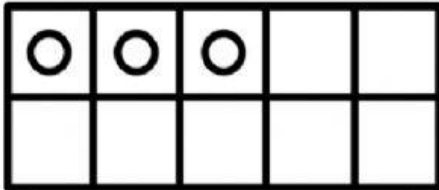


How Many More to Make 10?

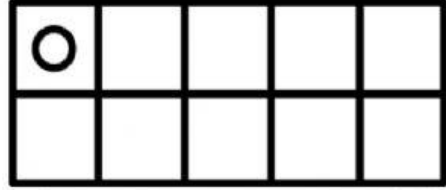
Directions: Count how many more needed to make ten. Write the number.

1



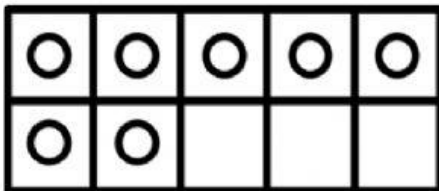
$$3 + \underline{\quad} = 10$$

2



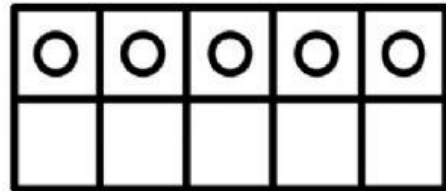
$$1 + \underline{\quad} = 10$$

3



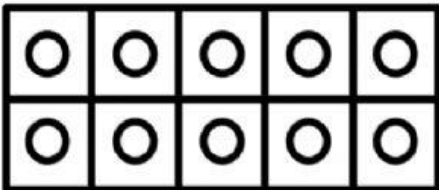
$$7 + \underline{\quad} = 10$$

4



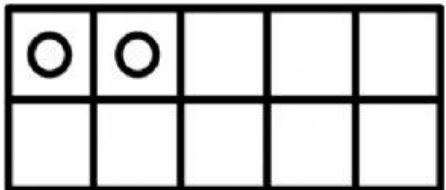
$$5 + \underline{\quad} = 10$$

5



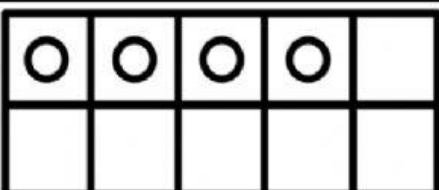
$$10 + \underline{\quad} = 10$$

6



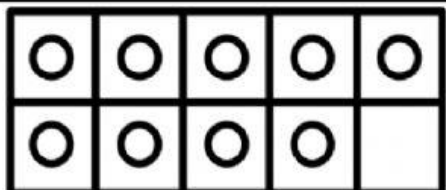
$$2 + \underline{\quad} = 10$$

7



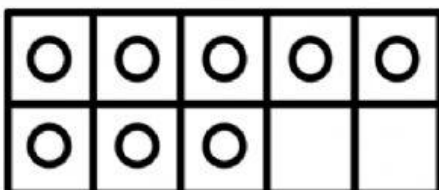
$$4 + \underline{\quad} = 10$$

8



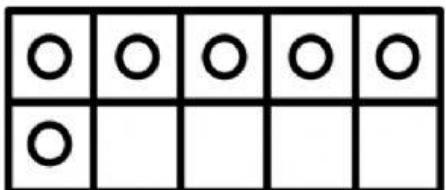
$$9 + \underline{\quad} = 10$$

9



$$8 + \underline{\quad} = 10$$

10



$$6 + \underline{\quad} = 10$$