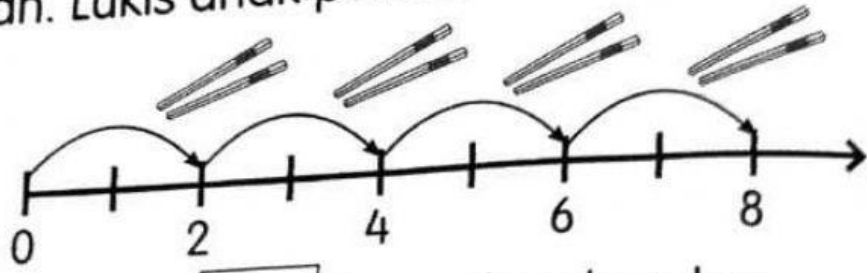


Aktiviti 2

Lengkapkan. Lukis anak panah. Isi tempat kosong.

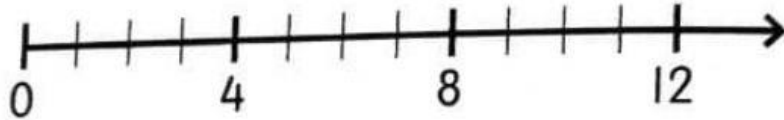
a



Ada kumpulan dua-dua.

$$\boxed{2} + \boxed{2} + \boxed{2} + \boxed{2} = \boxed{8}$$

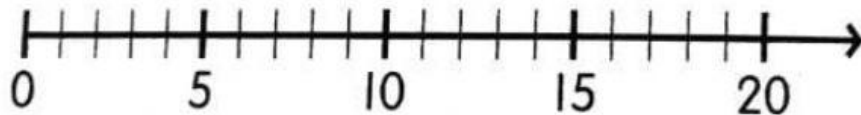
b



Ada kumpulan .

$$\boxed{} + \boxed{} + \boxed{} = \boxed{}$$


c



Ada kumpulan .

$$\boxed{} + \boxed{} + \boxed{} + \boxed{} = \boxed{}$$

d



Ada kumpulan .

$$\boxed{} + \boxed{} + \boxed{} + \boxed{} = \boxed{}$$