
















DELHI PUBLIC SCHOOL NEWTOWN  
SESSION 2021-2022  
MATHEMATICS WORKSHEET  
ADDITION

CLASS- I  
NAME - \_\_\_\_\_

SEC - \_\_\_\_\_  
DATE - \_\_\_\_\_

		WORKING OUT
1)	There are 6  . 5 more  come. How many are there now?	<div><div></div><div>+</div><div></div><div></div></div> <div><div></div>bicycles</div>
2)	I have 7  . I am given 5  more. How many  do I have?	<div><div></div><div>+</div><div></div><div></div></div> <div><div></div>footballs</div>
3)	Bert has 4  . Bill has 8  . How many in all?	<div><div></div><div>+</div><div></div><div></div></div> <div><div></div>fish</div>
4)	A cake shop sells 8  on Monday, and 5  on Tuesday. How many  in total?	<div><div></div><div>+</div><div></div><div></div></div> <div><div></div>doughnuts</div>
5)	I buy 7  on Wednesday. I buy 4  on Friday. How many  did I buy?	<div><div></div><div>+</div><div></div><div></div></div> <div><div></div>apples</div>