


Nama: _____

Tarikh: _____


Penambahan Gula-gula

Arahan : Tambah dan tulis jawapan dalam ruangan kosong dengan betul.



$$\boxed{4} + \boxed{2} = \boxed{}$$

6 4 5



$$\boxed{3} + \boxed{3} = \boxed{}$$

5 6 4



$$\boxed{2} + \boxed{0} = \boxed{}$$


5 4 2

Nama :


Tarikh :

Penambahan Gula-gula

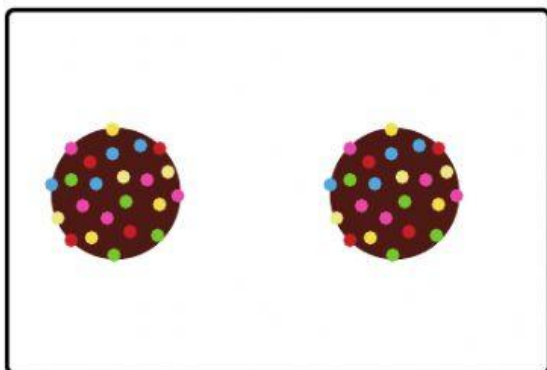
Arahan : Tambah dan tulis jawapan dalam ruang kosong dengan betul.



$$\square + \square = \square$$



$$\square + \square = \square$$



$$\square + \square = \square$$