

¡TÚ PUEDES!



ACTIVIDADES

1.- Relaciona cada número decimal con la figura que lo representa.




2,3

0,9


1,6

0,7


2.- Expresa con números decimales la parte coloreada de cada figura.




a)



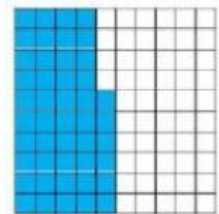
b)



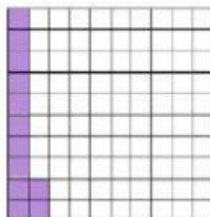
c)




d)




e)




f)




g)



h)



i)



j)