

***Kindly use Math H/W Copy to do this homework.**

H/W


Date: 8/7/21

Q Write how many sides each shape has?(Refer to the 3-D shapes- sides and corners pdf)

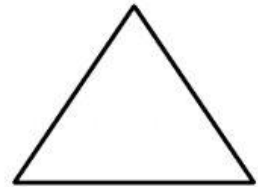
a.



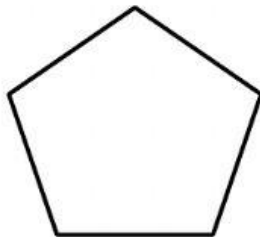
b.



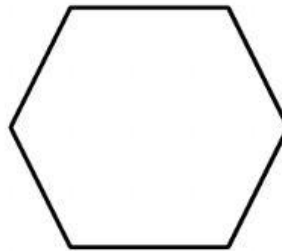
c.



d.



e.



f.

