



Value: 25 points

- A.** Instructions: Name the parts of a subtraction, drag and drop the pieces to the right answers. (1 Point each one)

$$6 - 1 = 5$$



Subtrahend

Difference

Minuend

- B.** Solve the following subtractions. (2 points each one)


$$\begin{array}{r} 37 \\ - 25 \\ \hline \end{array}$$



$$\begin{array}{r} 42 \\ - 25 \\ \hline \end{array}$$

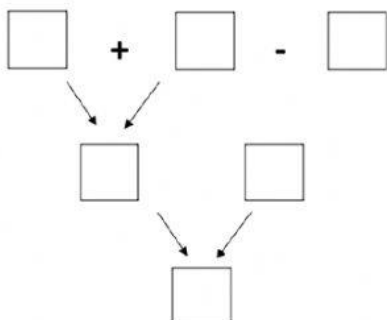

$$\begin{array}{r} 359 \\ - 254 \\ \hline \end{array}$$



$$\begin{array}{r} 33 \\ - 20 \\ \hline \end{array}$$


$$\begin{array}{r} 36 \\ - 18 \\ \hline \end{array}$$

- C.** Solve the following mixed operations. (1 point each box)

 $15 + 4 - 3 =$



 $16 - 2 + 6 =$

