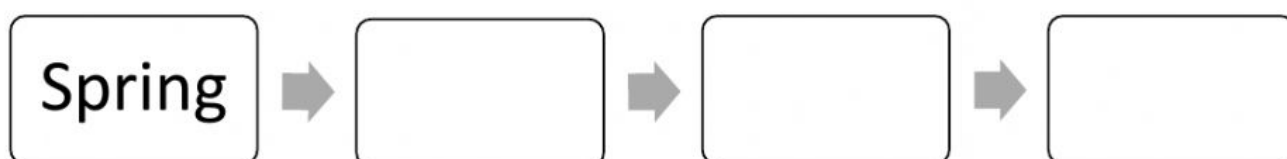
 Manahej	Science Department	Quiz: Plants and Seasons
	Grade 2:	Duration: 50 min.
	Name:	Score: 10

(0.25 pt. for neatness)

**Exercise 1: (1.5 pt.)**



Write the seasons in order starting from spring.

Autumn – Summer - Winter



**Exercise 2: (1.5 pt.)**

Match the season to its picture.



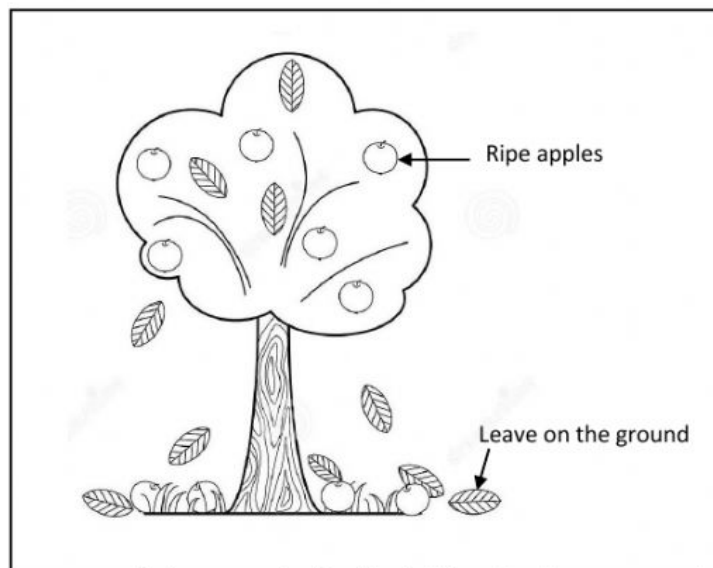
Winter

Summer

Spring

**Exercise 3: (2.25 pt.)**

**Observe the document and then answer the following questions.**



**Document 1:** Leaves and ripe apple fruits falling to the ground.

A. **Choose** the correct answers.

1. The leaves of the tree are:

a. falling to the ground

b. not falling to the ground.



2. The season in the picture above is:

a. spring

b. winter

c. autumn

3. During this season, the apple fruit is:

a. ripe and ready to eat






b. not ripe and not ready to eat.



shutterstock.com - 78467361

**Exercise 4 (4.50 pt.)**

**Observe** the table and then **answer** the following questions.

Spring	Summer
Strawberries 	Watermelon 
Medlar 	Cantaloupe 
	Mango 

1. **Choose** the name of one fruit that ripens in spring. \_\_\_\_\_

2. **Choose** the name of one fruit that ripens in summer. \_\_\_\_\_

3. **Count** the fruits that grow in:

a. summer.

b. spring.

- Indicate which number is bigger.

4. **Complete** the sentence.

The richest season in fruits is .

Good job!