








1ST GRADE – GENERAL KNOWLEDGE SCIENCE & TECHNOLOGY

INTERACTIVE WORKSHEET - 01

I. Choose the correct option for each of the following.

1. Look at the given pictures carefully odd one out.



- (a) a (b) b (c) c (d) d
2. Which of the following runs on electricity?
(a) Cycle (b) Bullock-cart (c) Refrigerator (d) Bus
3. Select the odd one out from the given group.
Refrigerator. Air conditioner. Water cooler. Mobile phone
(a) Refrigerator (b) Air conditioner (c) Water cooler (d) Mobile phone
4. What does a car run on?

(a) Water (b) Kerosene (c) Petrol (d) Cooking oil
5. The device in the picture helps us do things on a computer. It is an input device. What is it called?

(a) Printer (b) CD ROM drive (c) Monitor (d) Mouse
6. Which of the following you do NOT need to keep yourself tidy?

(a) Shampoo (b) Soap (c) Nail cutter (d) Pumpkin
7. Which of the following is NOT a source of light?
(a) Windowpane (b) Sun (c) Torch (d) Matchstick
8. What is a tyre made of?
(a) Leather
(b) Glass
(c) Rubber
(d) Cotton

9. This device is an input device that lets you type the text into a computer. What is it called?
(a) CD ROM drive
(b) Mouse
(c) Keyboard
(d) Speaker

10. Look at the picture. What is this item made of?

(a) Leather (b) Glass (c) Rubber (d) Plastic



AIMS-OLYMPIADS

LIVEWORKSHEETS

