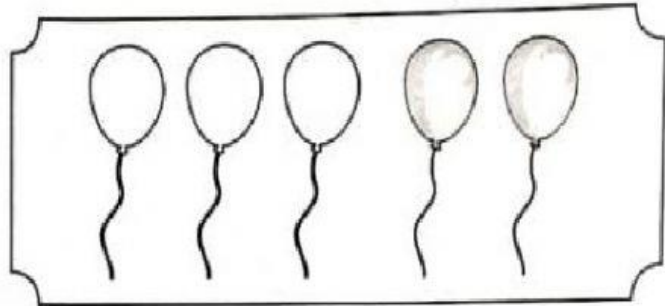


Mathematics Year 1


Recognise Addition

A. Fill in the blanks.


a 3 and 2 make .



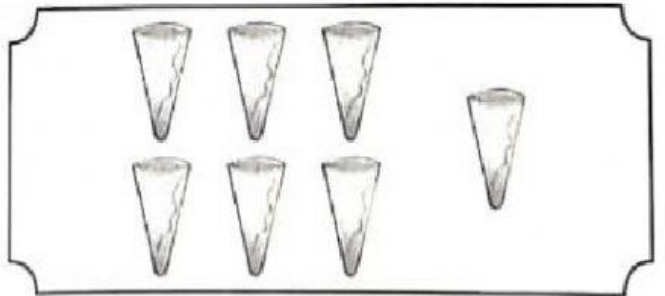
b 3 add 3 is .




c The sum of 5 and 4 is .



d 1 more than 6 is .





e There are deers altogether.



B. Choose the correct answer

a



There is 1  and 1 .

Balance Total is 2.

b



There are 3 big balloons and 3 small balloons. There are 6 balloons

balance altogether.

c



3 girls are playing at the playground. 1 boy is joining them. There are 4 children

left altogether.

d



There are 2 rings on the cone.

Johan puts another 3 rings.

Now, the difference total is 5 rings.

e



There are 8 toys in the box.

Mia adds removes 4 toys to make it a total of 12.