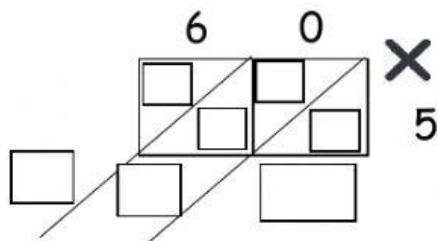


Nama :

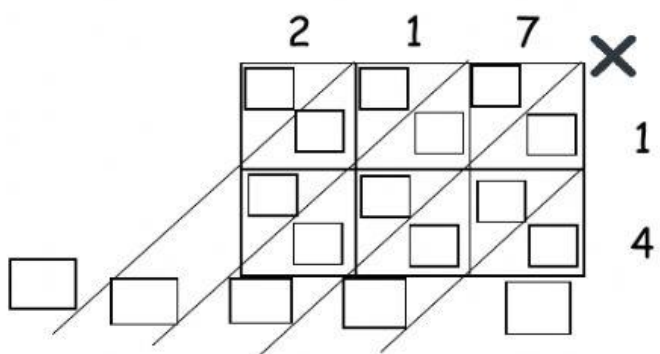
Tarikh :

Jawab semua soalan diberikan.

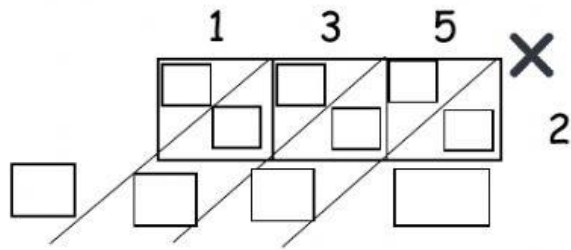
$$60 \times 5 = \underline{\underline{\quad\quad\quad}}$$



$$217 \times 14 = \underline{\underline{\quad\quad\quad}}$$



$135 \times 2 = \underline{\underline{\quad\quad\quad}}$



$322 \times 22 = \underline{\underline{\quad\quad\quad}}$

