

2nd Grade Primary.

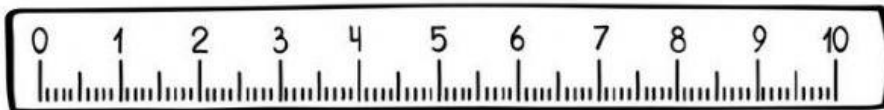
MATH EXAM

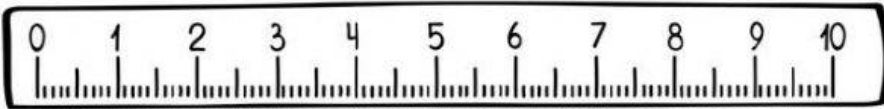
Fourth Bimester

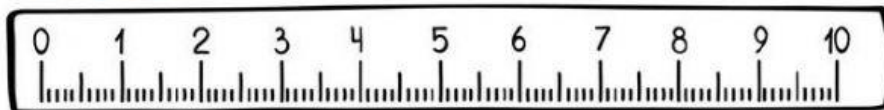
2020 – 2021

Name: _____

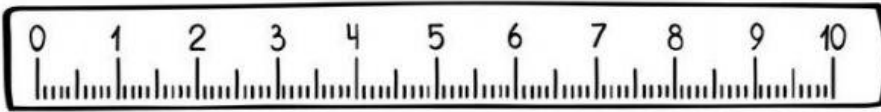
- I. Write how long is each object. **USA LA REGLA QUE TIENE DEBAJO.**















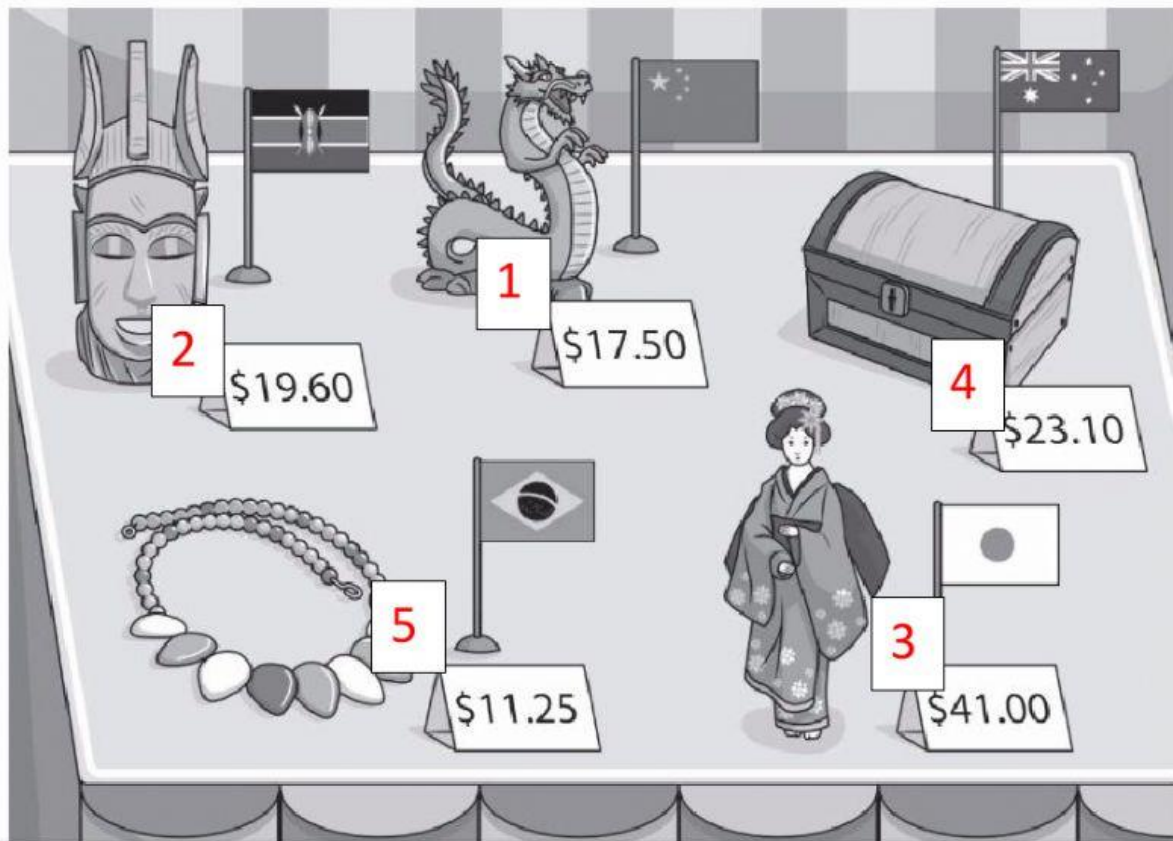
II. Read and number. Drag and paste.

<input type="checkbox"/>		<input type="checkbox"/>		<input type="text"/>	Mexico	<input type="text" value="\$5.00"/>
<input type="text"/>				<input type="text"/>	Brazil	<input type="text" value="\$21.35"/>
<input type="text"/>						
<input type="checkbox"/>		<input type="checkbox"/>		<input type="text"/>	Kenya	<input type="text" value="\$12.50"/>
<input type="text"/>				<input type="text"/>	China	<input type="text" value="\$15.75"/>
<input type="text"/>						

1. The necklace is from Brazil and it's twelve dollars and fifty cents.
2. The mask is from Mexico and it's fifteen dollars and seventy-five cents.
3. The drum is from Kenya and it's twenty-one dollars and thirty-five cents.
4. The fan is from China and it's five dollars.

III. Look and write the numbers with letter.

International Craft Fair



1. It's _____ dollars and _____ cents.

2. It's _____ dollars and _____ cents.

3. It's _____ dollars.

4. It's _____ dollars and _____ cents.

5. It's _____ dollars and _____ cents.

