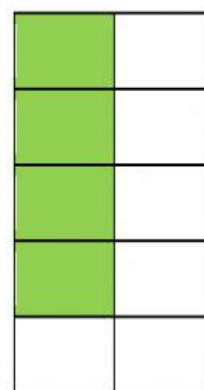



### Adición con 3 sumandos.

Observa el ejemplo los cuadritos están pintados de diferentes colores y según la cantidad, realiza lo mismo con los demás ejercicios, cuenta los cuadritos pintados y suma.





+	6
	3
=	5

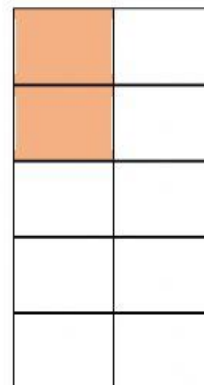






$$\begin{array}{c} 7 \\ 7 \\ 3 \\ \hline \end{array} \begin{array}{c} + \\ \\ \\ = \end{array} \begin{array}{c} \phantom{0} \\ \phantom{0} \\ \phantom{0} \\ \phantom{0} \\ \phantom{0} \end{array}$$



$$\begin{array}{c} 3 \\ 5 \\ 4 \\ \hline \end{array} \begin{array}{c} + \\ \\ \\ = \end{array} \begin{array}{c} \phantom{0} \\ \phantom{0} \\ \phantom{0} \\ \phantom{0} \end{array}$$





$$\begin{array}{|c|} \hline 1 \\ \hline 6 \\ \hline 8 \\ \hline \\ \hline \end{array} \begin{array}{c} + \\ \\ = \end{array}$$

