




Quiz 10


Name: _____ 1st grade / Group: ____ Product 10

School: _____ CCT: _____


I. Write  the answers in the correct place. There is an example.

seconds hand clock minutes hand hours hand digital clock sand clock

E.g. clock





1. _____

2. _____ 

3. _____

4. _____

5. _____ 

II. Circle  the days of the week. There is an example.

E.g.	<u>Sunday</u>	July	February
6.	April	March	Friday
7.	August	Tuesday	September
8.	June	May	Wednesday
9.	Saturday	October	December
10.	January	Thursday	February