



Parts and Characteristics of Plants

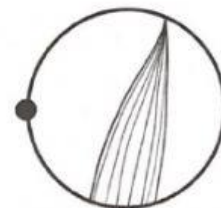
Date: _____



Match the following parts of plants.



Leaf with
netted veins



Leaf with
parallel veins



Woody stem



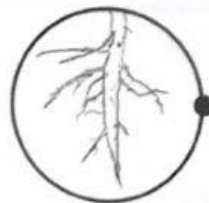
Non-woody
stem



Flowering



Non-
flowering



Fibrous
root



Taproot

6.1.1

Textbook
Pages:
52-54

35

Date: _____

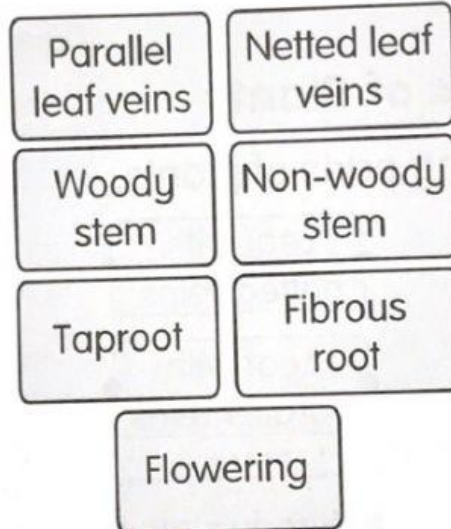


Comparing and Contrasting Parts of Plants

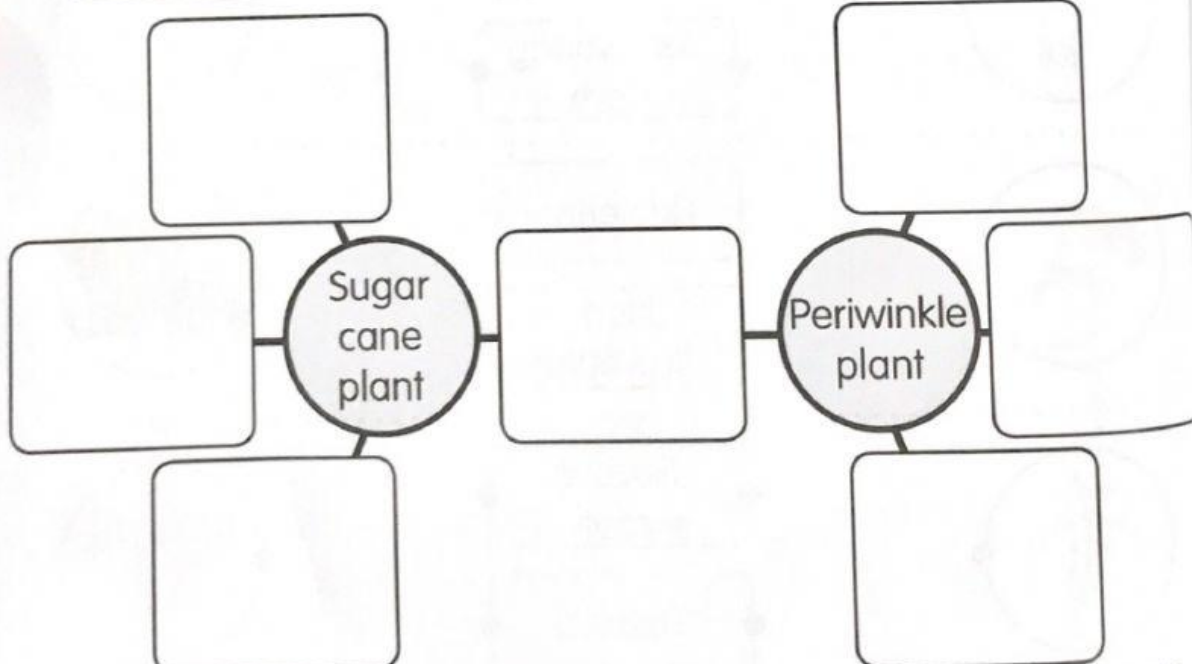
Fill in the similarities and differences of parts of plants in the mind map below.



sugar cane plant



periwinkle plant



6.1.1

36

Textbook
Pages:
52-55

Know the Characteristics of Parts of Plants

Date: _____



Observe the characteristics of the leaves and the plants below.



okra
plant



onion
plant



chives
plant



sunflower
plant

Fill in the name of the suitable plants in the table below.

Leaf	
Parallel veins	Netted veins
Root	
Fibrous root	Taproot

6.1.1

Textbook
Pages:
52-54

37