


Reading Scales using the Metric System: gram (g)



How much does the mango weigh?

_____g



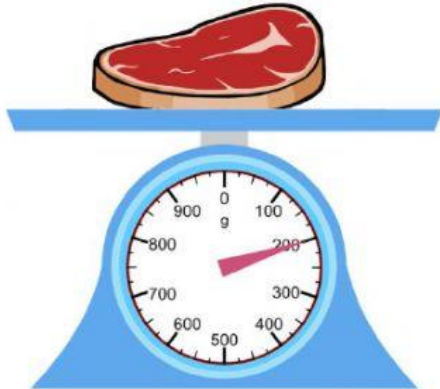
How much do the apples weigh?

_____g




How much do the strawberries weigh?

_____g



How much does the meat weigh?

_____g



How much does the chicken weigh?

_____g




How much do the grapes weigh?

_____g



How much does the fruit salad weigh?

_____g



How much do the avocados weigh?

_____g



How much do the oranges weigh?

_____g