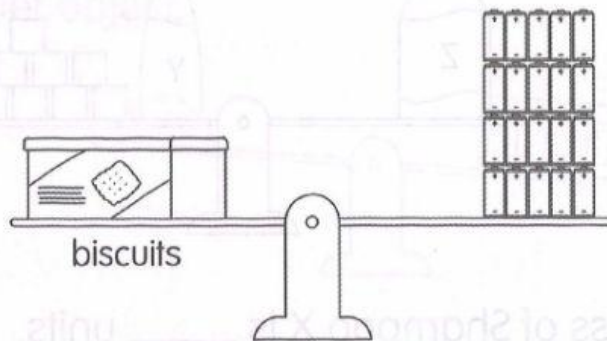
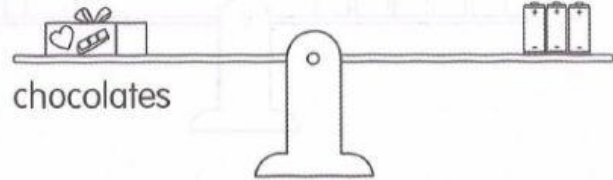
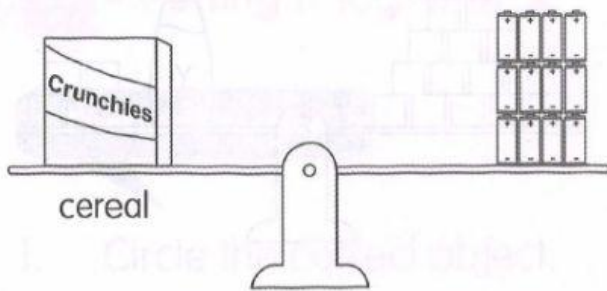


3. Look at the pictures. Then fill in the blanks.

1  stands for 1 unit.



- (a) The mass of the cereal is _____ units.
- (b) The mass of the chocolates is _____ units.
- (c) The mass of the biscuits is _____ units.
- (d) The biscuits are _____ units heavier than the cereal.
- (e) The chocolates are _____ units lighter than the biscuits.
- (f) The total mass of the cereal and the chocolates is _____ units lighter than the mass of the biscuits.

