

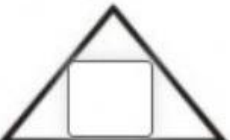
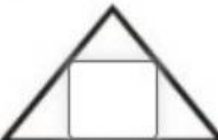





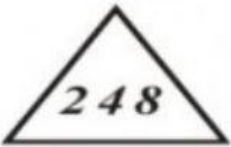
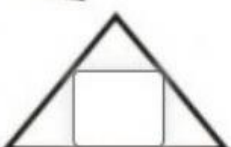
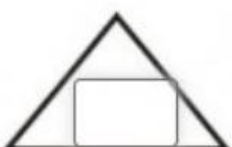
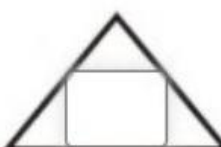
Completa las siguientes sucesiones numéricas.

1)   $\xrightarrow{+3}$    

2)   $\xrightarrow{+2}$    

3)   $\xrightarrow{-3}$    

4)   $\xrightarrow{-3}$    

5)   $\xrightarrow{+4}$    

6)   $\xrightarrow{+5}$    

7)   $\xrightarrow{-6}$    