














Mathematics

Pictograph

Clothes Collected

Shirt				
Dress				
Pants				
Skirt				
Jersey				

Look at the pictograph above and fill in the blank boxes.

- 1.) There are pants.
- 2.) was the most clothes collected.
- 3.) was the fewest clothes collected.
- 4.) There are shirts and dresses altogether.
- 5.) There are jerseys.
- 6.) There is skirt.
- 7.) jerseys and pants were collected altogether.
- 8.) dresses and skirt were collected altogether.