
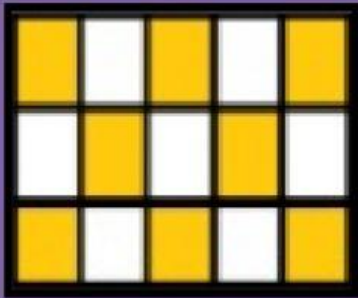




FRAÇÃO

QUAL É A FRAÇÃO PARA A PARTE COLORIDA?





$$\frac{8}{15}$$

$$\frac{2}{5}$$



$$\frac{1}{3}$$

$$\frac{1}{2}$$



$$\frac{3}{4}$$

