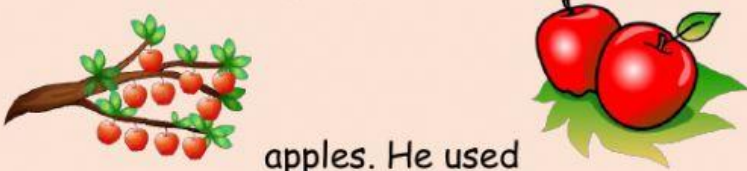



# SUBTRACTION within 10


Read each sentences problem then solve it and write the answer below.

Sentences	Answer
<p>1. There are  frogs in the pond.</p> <p>Then,  frogs hopped away. How many frogs are left?</p>	$4 - 3 = 1$
<p>2. Sally saw  fish. Then,</p> <p> fish swam away. How many fish were left?</p>	
<p>3. I made  sandcastles. Then,</p> <p> sandcastles got knocked over. How many sandcastles are left?</p>	

4. I had  cookies. My mom ate  
cookies. How many cookies do I have  
left?

5. Max went apple picking. He picking  apples. He used  
apples to bake apple pie. How many apples does  
he have left?

6. Mary has  stickers to give to her  
friends. She gives away. How many  
stickers does she left?

7. Ms Autry has  books about animals  
and she give to her child books.  
How many books does she left?

Write the correct answer below.

Example:



$$5 - 2 = 3$$



$$8 - 6 =$$



$$9 - 4 =$$



$$9 - 1 =$$



$$10 - 8 =$$



$$7 - 3 =$$



$$8 - 1 =$$



$$10 - 1 =$$



$$10 - 4 =$$



$$6 - 3 =$$



$$6 - 5 =$$



$$4 - 1 =$$



$$6 - 4 =$$



$$5 - 4 =$$



$$7 - 1 =$$





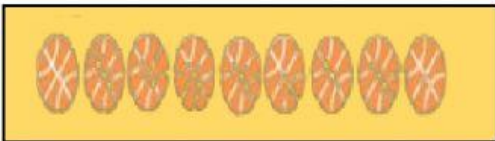





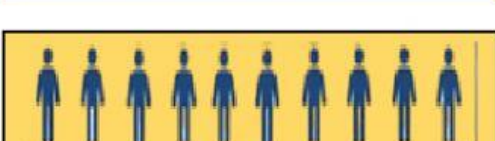
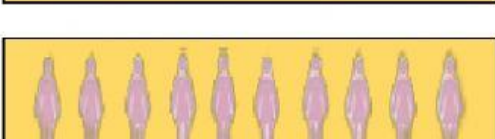
$$5 - 3 =$$



$$6 - 2 =$$



Count and write the correct answer.

$4 - 2$		$=$	<input type="text"/>
$5 - 3$		$=$	<input type="text"/>
$9 - 3$		$=$	<input type="text"/>
$7 - 5$		$=$	<input type="text"/>
$8 - 4$		$=$	<input type="text"/>
$6 - 1$		$=$	<input type="text"/>
$4 - 3$		$=$	<input type="text"/>
$7 - 2$		$=$	<input type="text"/>
$10 - 7$		$=$	<input type="text"/>
$10 - 2$		$=$	<input type="text"/>