
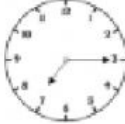



12 and 24 hour clock including a.m and p.m

Q1.

Match the times to the clocks showing the same time.

9 o'clock in the morning		19 : 15
Half past 3 in the afternoon		09 : 00
Quarter past 7 in the evening		15 : 30

Q2.

Complete the times.

13 : 45	Quarter to two in the _____	__ : 45	Quarter past three in the afternoon
11 : 20	Twenty past eleven in the _____	17 : __	Twenty-five to six in the evening
15 : 50	Ten to four in the _____	__ : __	Twenty to 9 in the morning

Q3

Sort the times from latest to earliest.

5:30 p.m.	9:45 a.m.	9:45 p.m.	10:23 a.m.
7:31 a.m.	10:13 p.m.	8:30 a.m.	6:32 a.m.

Latest _____ Earliest