


exit ticket

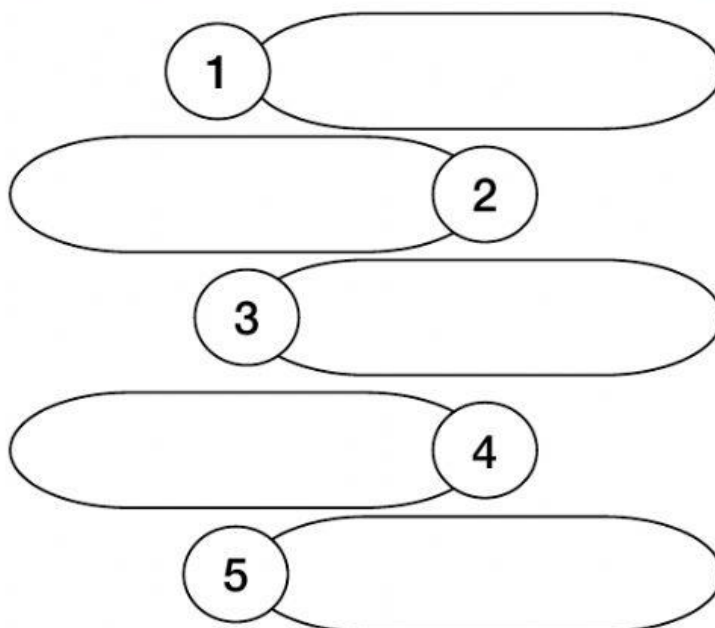

Drag and drop the eggs.  
Put 20 eggs equally into 5 baskets.  
Then complete the answer.



$20 : 5 = \underline{\hspace{2cm}}$

There are \_\_\_\_\_ eggs in each group.

Drag and drop the fish.  
Put 15 fish equally into groups of 3.  
Then complete the answer.



$15 : 3 = \underline{\hspace{2cm}}$

There are \_\_\_\_\_ groups of fish.