

Name: _____

Class: I

Date: _____ June 2021

Subject: Social studies

Q1. Drag and drop different types of transports according to their means

Helicopter

boat

van

submarine

bus

rocket

bicycle

truck

air balloon

Land

Air

Water

b) Identify **ancient** and **modern** transport. Choose the right option









Q 2. Look at the picture and differentiates between seasons, weather.

Drag and drop right option

Spring

sunny

summer

storm

Autumn

cloudy

winter

Snow

rainy

















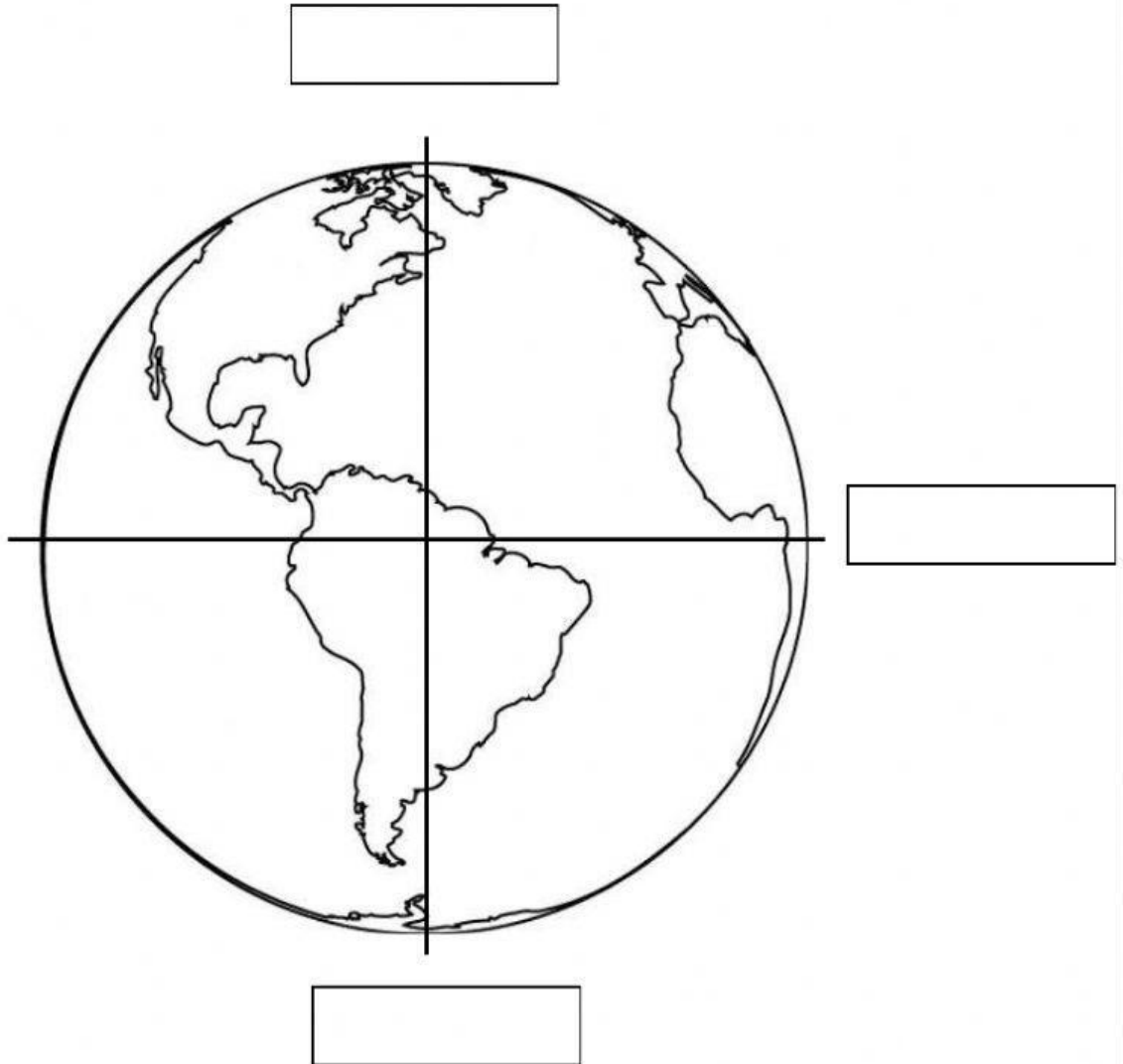
Q 3. Recognize the phenomena of equator, North and south poles.
Label the image using words from the word bank.

Drag and drop the right option

North pole

South pole

Equator



Q. 4 Fill in the blanks with correct answer. Drag and drop right option.

1. _____ is the religion of Muslims (Christianity, Islam)

2. Hindus follow _____ religion. (Hinduism, Judaism)

3. Mosque is the worship place of _____. (Muslims, Christians)

4. _____ is celebrated after Ramazan by Muslims. (Eid ul Fitr, Eid ul Azha)

5. Christmas festival is a _____ festival. (Cultural, religious)

b) Identify worship places and books. Drag and drop right option

Four religion around the world

Word bank			
Mosque	Church	Temple	
Quran	Bible	Vedas	
Religion	Worshippers	Place of worship	Holy Books
Islam	Muslims		
Christianity	Christians		
Hinduism	Hindu		
Buddhism	Buddha	Stupa	Pali Canon/ triptikata

Q 5. Write names of five pillars of Islam,

a) Five pillars of Islam

1. _____

2. _____

3. _____

4. _____

5. _____

b) Fill in the blanks .Describe five pillars of Islam. Drag and drop right option.

Namaz	Roza	Iman	Zakat	Hajj
-------	------	------	-------	------

1. _____ means establishing of the daily prayers.

2. _____ means to show concern for the almsgiving to the needy.

3. _____ means self purification through fasting.

4. _____ means to have faith and belief in one Allah.

5. _____ means the pilgrimage to Makkah for those who are able.

Q. 6 Look at the map and write the names of the oceans using word bank.

Drag and drop the right option

Pacific Ocean

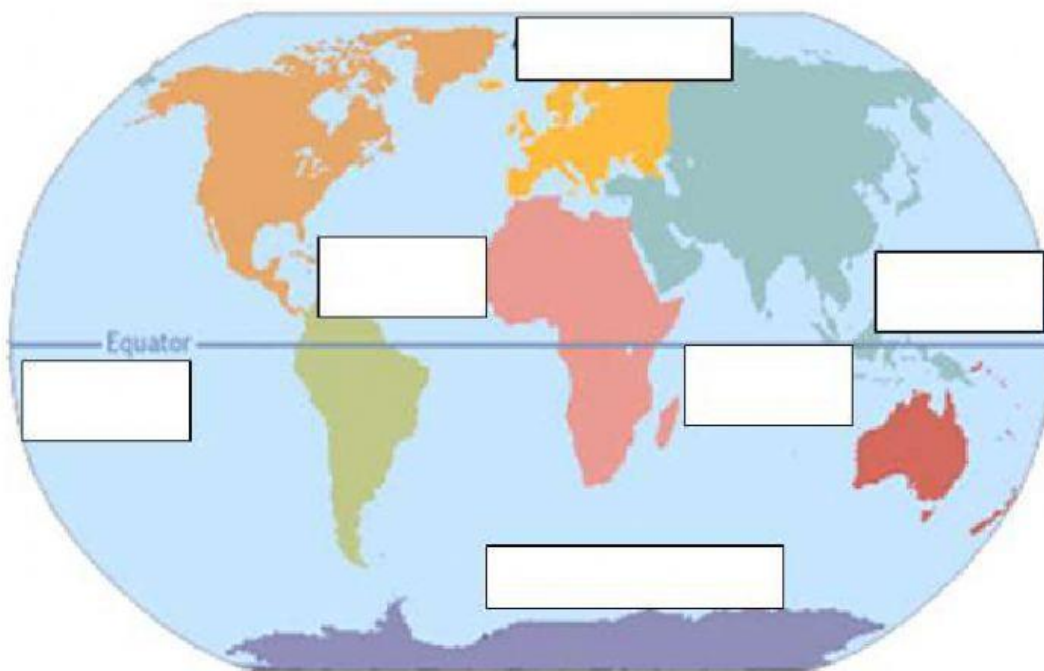
Atlantic Ocean

Indian Ocean

Arctic Ocean

Southern ocean


Pacific Ocean



Q. 7 Read the statements about water bodies and landform. Choose (T) for true and (F) for false statement.

	Statements	T/F
1)	An island is a piece of land that is surrounded by water.	
2)	A lake is the biggest water body.	
3)	Hot dry place with little or no water is a desert.	
4)	Ocean water is very salty.	
5)	Mountain is a very high rocky land.	

Q.8 Identify and choose correct physical features of various landforms

☐

mountain

☐


desert

☐

valley

☐

island

☐

desert

☐

glacier

☐

volcano

☐

river



Q.9 Match the types of pollution with images of its causes.



Noise pollution



Land pollution



Water pollution



Air pollution

Q. 10. Write: Describe the importance of water for life by looking at pictures.

