

SEMANA DE NIVELACIÓN

SUBNIVEL ELEMENTAL
Segundo Grado

Actividad de Matemática (SUMA)

FECHA: _____
NOMBRE: _____

SEMANA #6



Indicaciones:

1. Lee la ficha en compañía de tu representante.
2. Resuelve las siguientes sumas de manera correcta.



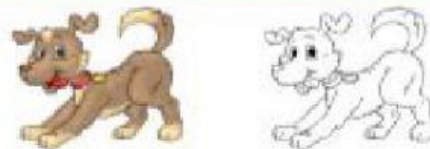
$$2 + 6 = \boxed{}$$




$$4 + 3 = \boxed{}$$



$$5 + 1 = \boxed{}$$



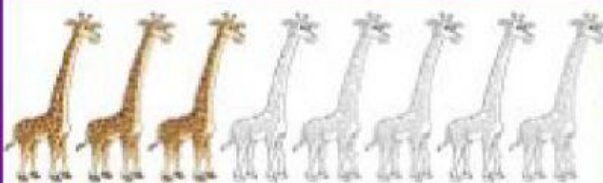
$$1 + 1 = \boxed{}$$



$$3 + 3 = \boxed{}$$




$$3 + 2 = \boxed{}$$




$$3 + 5 = \boxed{}$$



$$7 + 2 = \boxed{}$$



$$1 + 9 = \boxed{}$$



$$1 + 6 = \boxed{}$$