



Colegio Nourish

2020-2021

June Exam

2nd Grade

Math

Name: _____ List # _____

Date: _____ Teacher: Jacklenis Salazar

I.- Solve the problems and choose the answer.

1. Susan collects stamps. She bought 13 stamps on Tuesday. Then, her dad brought 5 more. How many stamps does she have?

- a) 8 b) 20 c) 18

2. Rachel has \$500 Pesos. She bought a toy that cost \$350 Pesos. How much does she have now?

- a) \$200 b) \$150 c) \$850

II. Solve the following additions. (3,4)

$$16 + 42 + 12 + 22 = \underline{\hspace{2cm}}$$

$$191 + 302 = \underline{\hspace{2cm}}$$

III. Solve the following subtractions. (5,6)

$$662 - 180 = \underline{\hspace{2cm}}$$

$$150 - 40 = \underline{\hspace{2cm}}$$

IV. Choose if the number is an odd or even number. (7,8)

11 : odd even

18 : odd even

V. Drag the time to complete the sentence. (9)



I wake up at _____.

12:35 p.m

7:00 a.m.

VI. Drag and drop.

10. How many hundreds, tens, and ones does the number have?

738 : _____ hundreds, _____ tens, and _____ ones.

30 700 8

VII. Match the concepts with their examples. (11-13)

Expanded form

Three hundred twenty-eight

Word form

$300 + 20 + 8$

Standard form

328

VIII. Complete the following skip counting. (14,15)

10, 15, 20, _____, 30, 35.

30, 40, 50, 60, _____, 80, 90.

IX. Choose the symbol to compare the numbers. (16-18)

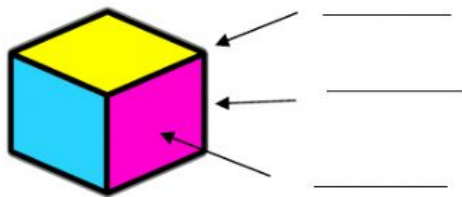
Greater than > Less than < equal to =

820 700

160 300

89 89

X. Drag the names to each part of the cube. (19-21)



face

edge


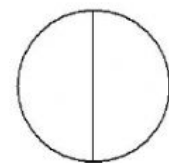
vertex

XI. Drag the name of each part. (22-24)

fourths

halves

thirds



XII. Choose the fraction of the colored shape. (25)



a) $\frac{2}{3}$


b) $\frac{1}{3}$

XIII. Solve the problems.

26. Kate has 3 friends and she wants to give 2 cupcakes to each one. How many cupcakes does she have?

$$3 \times 2 = \underline{\hspace{2cm}}$$

27. Mary has 12 balloons. She wants to share them with her 4 friends. How many balloons does she need to give to each one?



- a) 3 b) 2 b) 4

XIV. Drag the words to complete. (28-30)

Difference sum addends

$5 + 4 = 9$ 9 is the _____ 5 and 4 are the _____.

$8 - 3 = 5$ 5 is the _____.