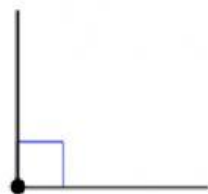


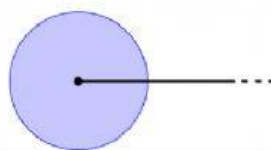
CHE ANGOLO È?



piatto
retto




piatto
ottuso



piatto
giro



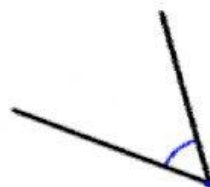
ottuso
acuto



ottuso
acuto



piatto
ottuso



retto
acuto