


Practice



The crayon is _____ centimeters long.

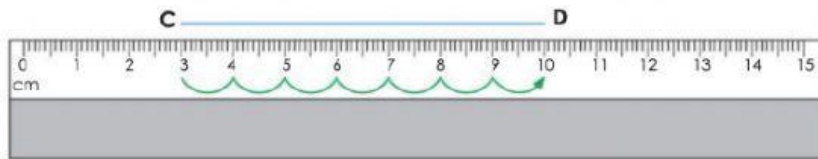
The scissors are _____ centimeters long.

The glue stick is _____ centimeters long.

The _____ is/are the shortest object.

The _____ is/are the longest object.

How will you find the length of CD?



Line CD is _____ centimeters long.

Complete the sentences with centimeters, meters, grams or kilograms.

a) My teacher is shorter than 2 _____.

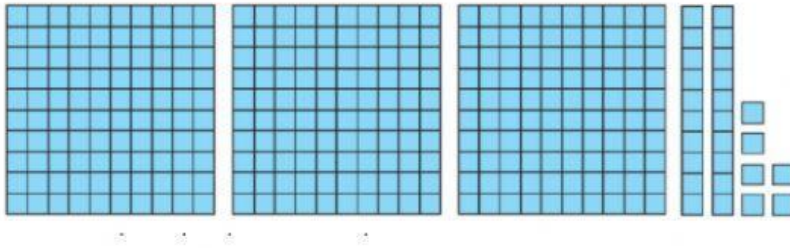
b) A swimming pool is about 20 _____.

c) A dollar bill is about 1 _____.

d) My pencil case is about 18 _____.


e) A tiger weights about 120 _____.

f) A bee weights about 2 _____.



Standard Form: _____

Expanded Form: _____



Standard Form: _____

Expanded Form: _____