


EVALUACIÓN PARCIAL DE UNIDADES Y DECENAS


1) Completa la cantidad de Decenas (D) y Unidades (U):



D	U



D	U

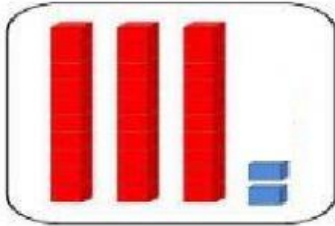


D	U

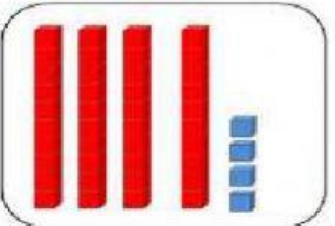


D	U

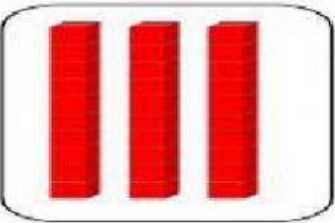
2) Cuenta y une:



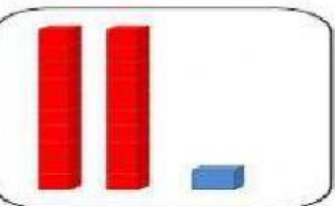
21



30

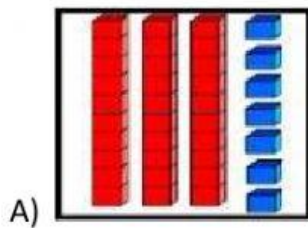


44

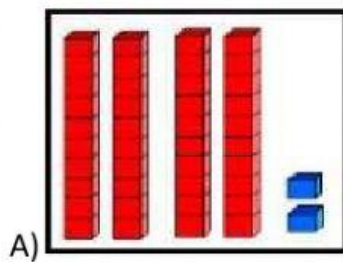
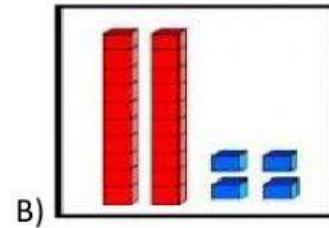


32

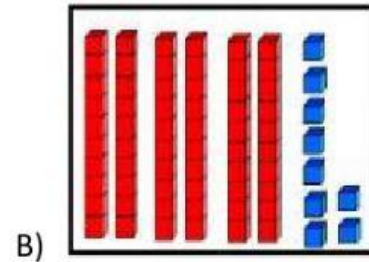
3) Observa la representación y marca la alternativa correcta:



24



69



4) Suma y resta según corresponda, recuerda comenzar por la unidad:

- SUMA

D	U
7	1
+2	6

D	U
5	4
+2	3

D	U
8	2
+1	2

D	U
3	9
+3	0

- RESTA

D	U
3	5
-1	4

D	U
4	2
-3	2

D	U
7	1
-5	1

D	U
8	1
-4	0