



Science Exam  
3rd Trimester  
5th grade

Name: \_\_\_\_\_

Date: \_\_\_\_\_

**1. Write the numbers.**

a) 79,140 \_\_\_\_\_




b) 100 \_\_\_\_\_

c) 65,654 \_\_\_\_\_

d) 9,521 \_\_\_\_\_

e) 161,989,900 \_\_\_\_\_

**2. Write the seasons.**



3. Complete the chart with the correct month.

Months of the Year		
last month	this month	next month
October	November	December
August		
February		

	June	
	January	
		April
		September
March		
July		