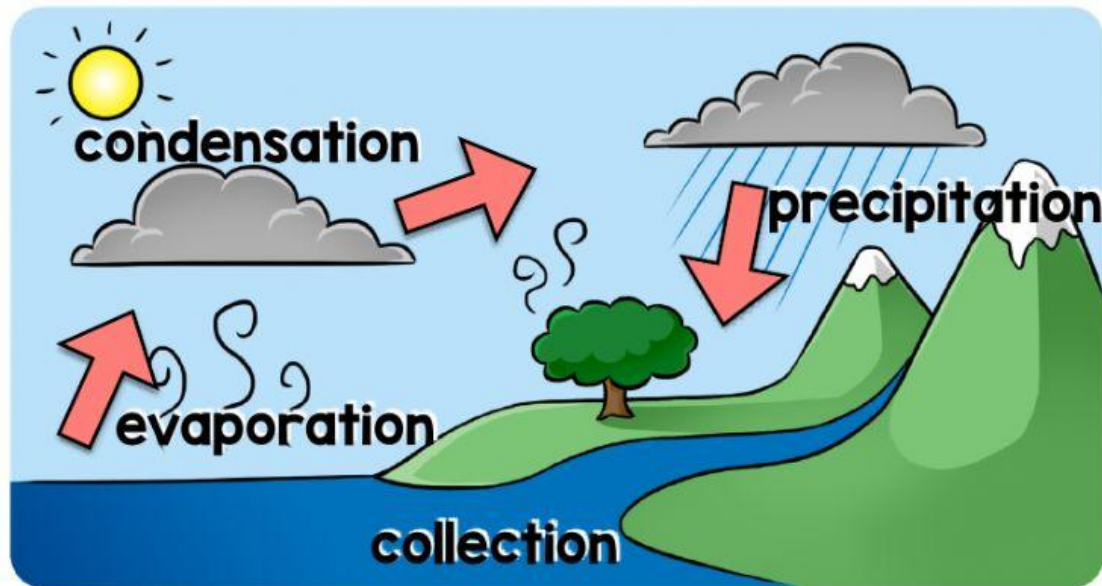
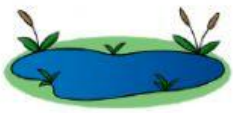


Anchor Chart - Unit 7

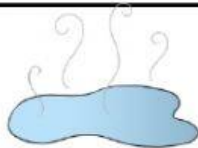
WATER CYCLE



precipitation: water
from sky/clouds



collection: water
collects on the ground



evaporation: water going
up by changing into water vapor



condensation: water
vapor changes into liquid

Level 3

Read the text and then answer the questions:


Precipitation comes down from the clouds in the form of rain or snow. Water collects on the ground. Water then goes up into the sky as water vapor. You can't see water vapor. The water vapor then turns into liquid water during condensation. Condensation forms clouds. Then the whole process starts again!

1. Where does precipitation come from?

2. Can you see water vapor?

3. How are clouds formed?

Fill in the names for each part of the water cycle:



Fill in the blanks:

Freezing: going from liquid to _____.**Evaporation:** going from _____ to gas.

Fill in the blanks using the following words:

cloud

water vapor

ground

up

Water falls from a _____ and collects on the
_____. Then the water evaporates. It goes
_____ in the air and turns into _____.


Circle the correct answer:

water turning to water vapor☐ evaporation ☐ precipitation ☐ collection**water collects on the ground**☐ condensation ☐ collection ☐ precipitation**water vapor changing into liquid**☐ evaporation ☐ condensation ☐ collection**water falling from the sky**☐ evaporation ☐ precipitation ☐ condensation

Answer the questions:



What is condensation?



What is precipitation?



During evaporation, where does water go?

Match:



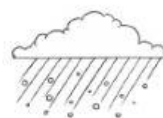
collection



evaporation



condensation



sun



precipitation



evaporation