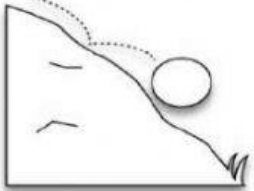




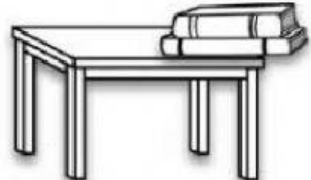


# Kinetic or potential energy?

NAME: \_\_\_\_\_

1. WRITE THE TYPE OF ENERGY THAT IS BEING SHOWN

<p>A BALL ROLLING.</p>  <p>_____</p>	<p>A SODA TIN NOT OPENED.</p>  <p>_____</p>	<p>A BOY THROWING A BALL.</p>  <p>_____</p>
<p>A BALL BEFORE BEING KICKED.</p>  <p>_____</p>	<p>A CAR MOVING.</p>  <p>_____</p>	<p>BOOKS ON THE TABLE</p>  <p>_____</p>

2. WHAT IS THE POTENTIAL ENERGY?

3. WHAT IS THE KINETIC ENERGY?