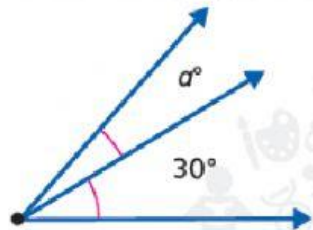


Independent Practice

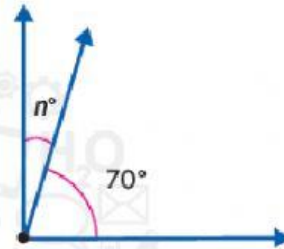
Algebra Find each unknown.

4. The combined angle measure is 50° .



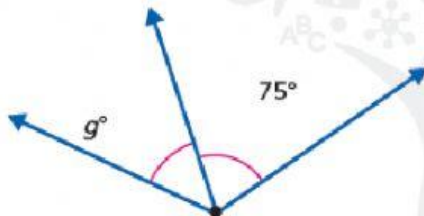
$\alpha =$ _____

5. The combined angle measure is 90° .



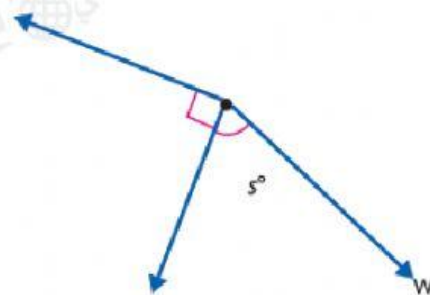
$n =$ _____

6. The combined angle measure is 125° .



$g =$ _____

7. The combined angle measure is 150° .



$s =$ _____