



Find the Area of the following squares. Remember to use the formula: **S x S**

6cm




$$\begin{aligned}\text{Area of } \square &= S \times S \\ &= 6 \times 6 \\ &= 36 \text{ cm}^2\end{aligned}$$


7cm




9cm



8cm



4cm



10cm

